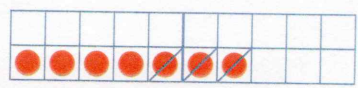

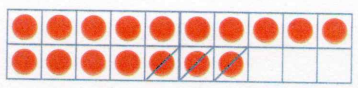


+  
-  
=

# Subtrahieren ohne Zehnerübergang



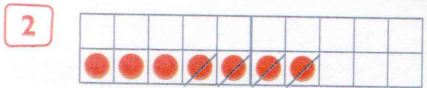
Das kann ich rechnen  
 $7 - 3 =$




Wenn  $7 - 3 =$    
 dann:  $17 - 3 = 1$

Rechne erst die bekannte Aufgabe.

Übertrage das Ergebnis.

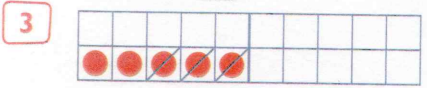


$19 - 4$

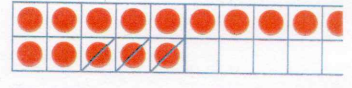


$9 - 4 =$

- 4 =




$15 - 3$

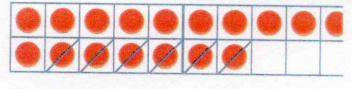


$5 - 3 =$

- 3 =



$17 - 6$



-  =

-  =

Lege erst mit Plättchen. Rechne dann.

- 5  $5 - 3 =$        $6 - 2 =$        $7 - 5 =$        $9 - 5 =$     
 $15 - 3 =$        $16 - 2 =$        $17 - 5 =$        $19 - 5 =$

Berechne die Differenz.

- 6  $15 - 4 =$        $19 - 7 =$        $12 - 2 =$        $18 - 6 =$     
 $17 - 5 =$        $14 - 3 =$        $16 - 5 =$        $19 - 8 =$

$7 - 4$	$9 - 6$	$10 - 5$	$8 - 0$	$10 - 7$	$8 - 4$	<b>WIEDERHOLE</b>
$6 - 6$	$5 - 0$	$9 - 3$	$6 - 6$	$7 - 3$	$9 - 7$	