










Addieren und Subtrahieren ohne Zehnerübergang

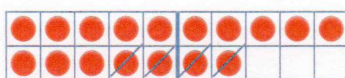




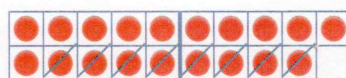


1  $4 - 3 =$ 





 $- 4 =$ 






 $-$  $=$ 






 $14 - 3 =$ 

 $-$  $=$ 

 $-$  $=$ 

2  $+ 4 =$  $16 +$  $=$ 

 $+$  $=$  $+$  $=$ 

 $+$  $=$  $+$  $=$ 

3 Was gehört zusammen?

$7 - 3$

$17 - 3$



Schreibe so:

$7 - 3 = 4$

$17 - 3 = 14$

$19 - 0$

$7 - 5$

$9 - 8$

$7 - 2$

$-$

$17 - 5$

$17 - 2$

$19 - 8$

$15 - 3$

$9 - 0$

$18 + 2$

$3 + 6$

$14 + 5$

$7 + 2$

$12 + 8$








$4 + 5$








$17 + 2$







$8 + 2$

$2 + 8$

$13 + 6$

4 $16 - 2 =$  $16 - 3 =$  $16 - 4 =$  $16 -$  $=$  $-$  $=$ 

5 $15 - 0 =$  $15 - 1 =$  $15 - 2 =$  $15 -$  $=$  $-$  $=$ 

6 $19 - 1 =$  $19 - 3 =$  $19 - 5 =$  $19 -$  $=$  $-$  $=$ 